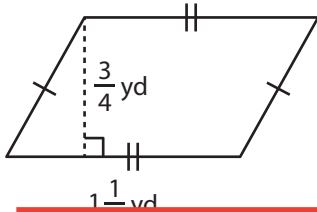


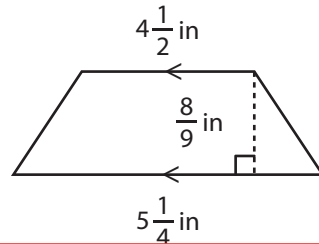
Area of a Quadrilateral

Find the area of each quadrilateral.

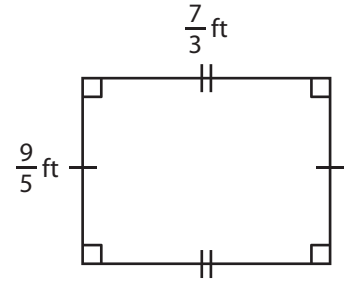
1)



2)



3)



4)

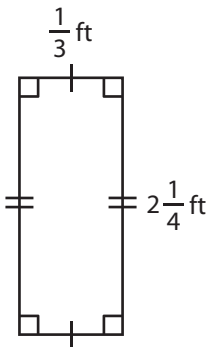
Preview

Become a member to unlock
unrestricted access to both printable
and online worksheets.

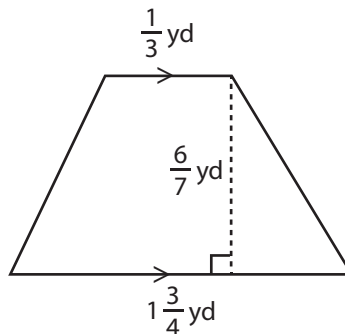


www.tutoringhour.com

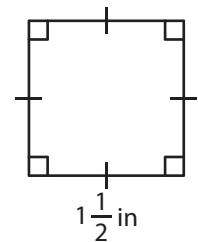
7)



8)



9)



Area = _____

Area = _____

Area = _____