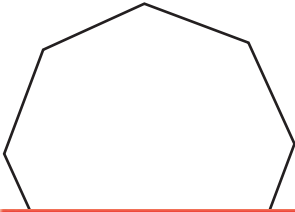


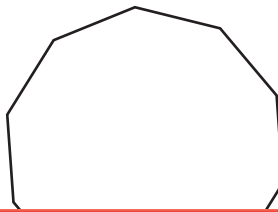
Area of a Polygon

Find the area of each regular polygon. Round your answer to two decimal places.

1)



2)



3)



4)

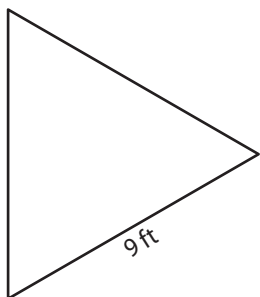
Preview

Become a member to unlock
unrestricted access to both printable
and online worksheets.

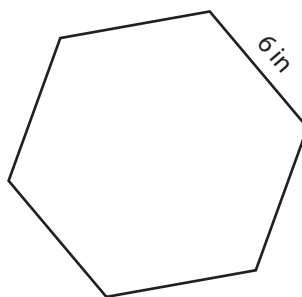


www.tutoringhour.com

7)



8)



9)

