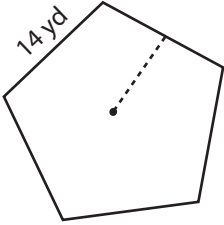


Polygon | Apothem

Find the perimeter and apothem of each polygon. Round your answer to two decimal places.

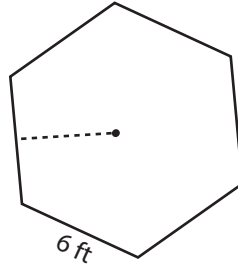
1)

Area: 337.21 yd²

Perimeter: _____

Apothem: _____

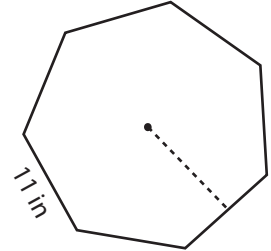
2)

Area: 93.53 ft²

Perimeter: _____

Apothem: _____

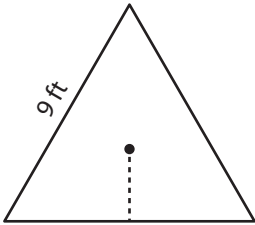
3)

Area: 439.7 in²

Perimeter: _____

Apothem: _____

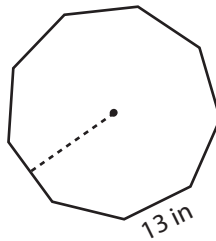
4)

Area: 35.07 ft²

Perimeter: _____

Apothem: _____

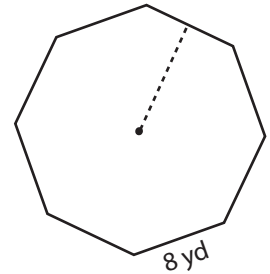
5)

Area: 1,044.73 in²

Perimeter: _____

Apothem: _____

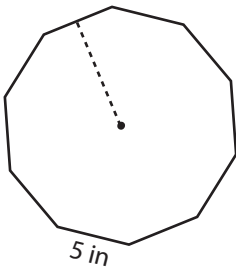
6)

Area: 309.01 yd²

Perimeter: _____

Apothem: _____

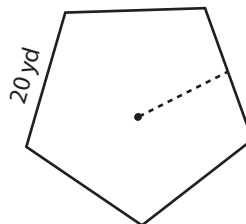
7)

Area: 192.36 in²

Perimeter: _____

Apothem: _____

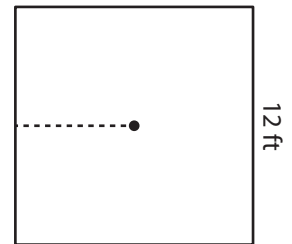
8)

Area: 688.15 yd²

Perimeter: _____

Apothem: _____

9)

Area: 144 ft²

Perimeter: _____

Apothem: _____