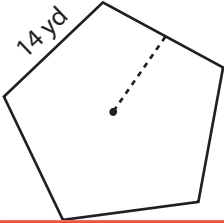


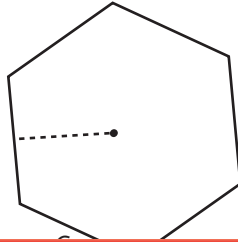
Polygon | Apothem

Find the perimeter and apothem of each polygon. Round your answer to two decimal places.

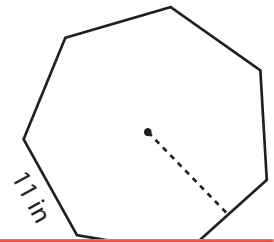
1)



2)



3)



Per

Ap

Preview

4)

Become a member to unlock
unrestricted access to both printable
and online worksheets.

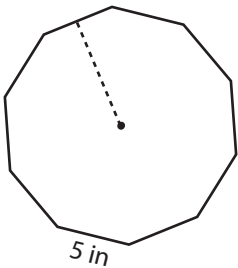
Per

Ap

www.tutoringhour.com



7)

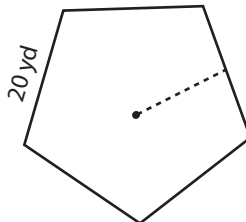


Area: 192.36 in^2

Perimeter: _____

Apothem: _____

8)

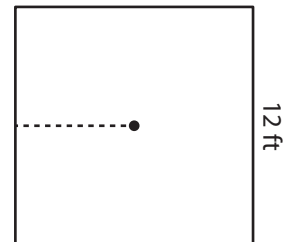


Area: 688.15 yd^2

Perimeter: _____

Apothem: _____

9)



Area: 144 ft^2

Perimeter: _____

Apothem: _____