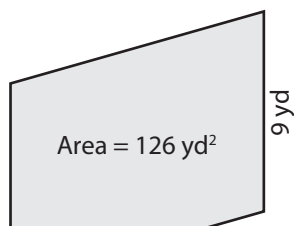


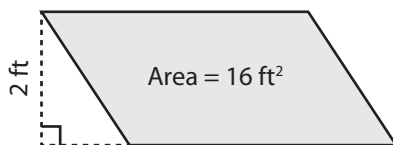
Finding the Base or Height

Find the base or height of each parallelogram.

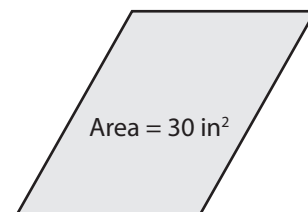
1)



2)



3)



Heig

Preview

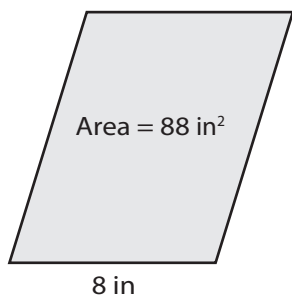
4)

Become a member to unlock
unrestricted access to both printable
and online worksheets.

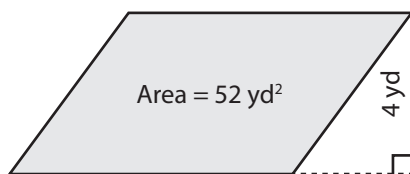
Ba

www.tutoringhour.com

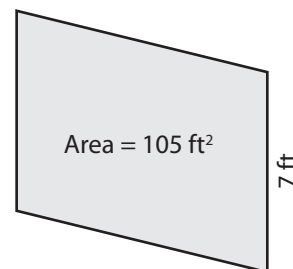
7)



8)



9)



Height = _____

Base = _____

Height = _____