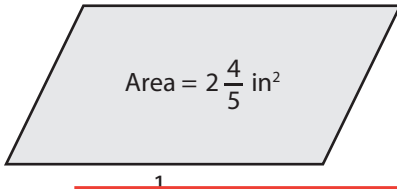


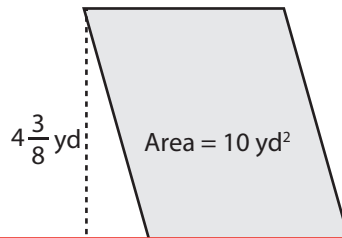
Finding the Base or Height

Find the base or height of each parallelogram.

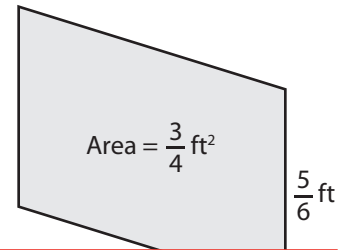
1)



2)



3)



Heig

Preview

4)

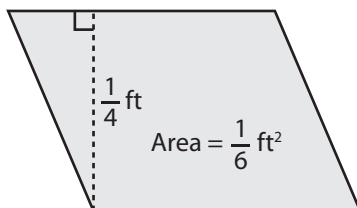
Become a member to unlock
unrestricted access to both printable
and online worksheets.



Ba

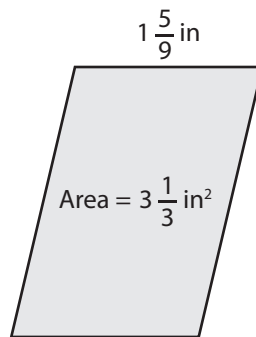
www.tutoringhour.com

7)



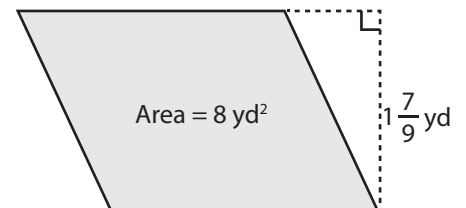
Base = _____

8)



Height = _____

9)



Base = _____