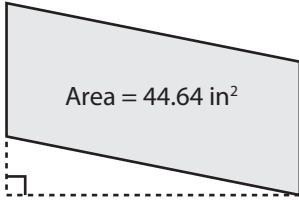


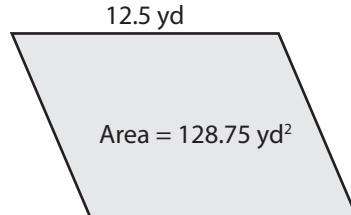
# Finding the Base or Height

Find the base or height of each parallelogram.

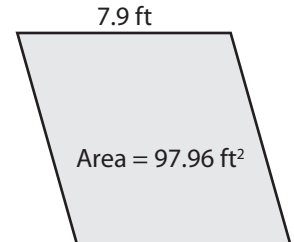
1)



2)



3)



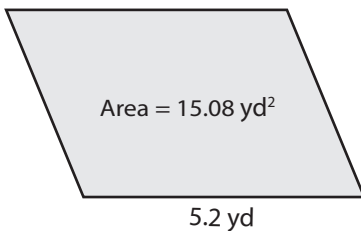
4)

Preview

Become a member to unlock  
unrestricted access to both printable  
and online worksheets.

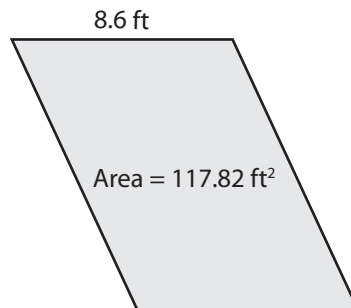
www.tutoringhour.com

7)



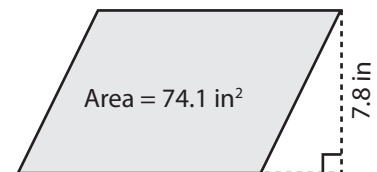
Height = \_\_\_\_\_

8)



Height = \_\_\_\_\_

9)



Base = \_\_\_\_\_