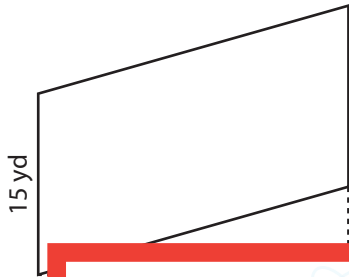


Area of a Parallelogram

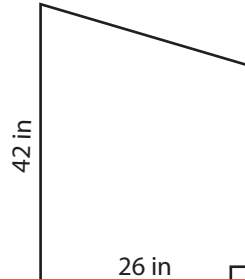
Find the area of each parallelogram.

1)

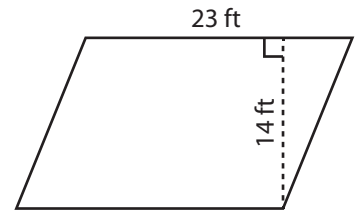


Ar

2)



3)



4)

Ar

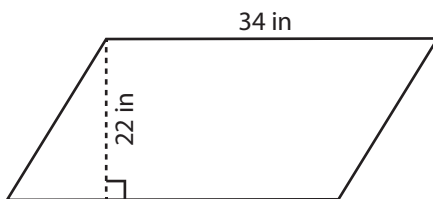
Preview

Become a member to unlock
unrestricted access to both printable
and online worksheets.



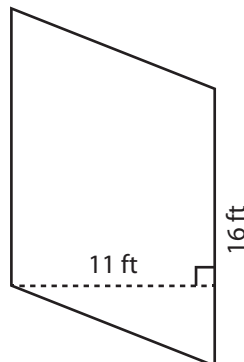
www.tutoringhour.com

7)



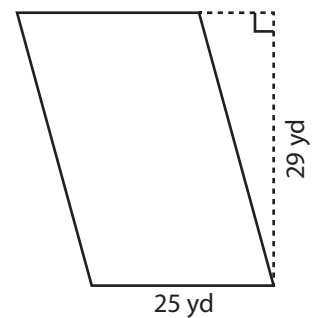
Area = _____

8)



Area = _____

9)



Area = _____