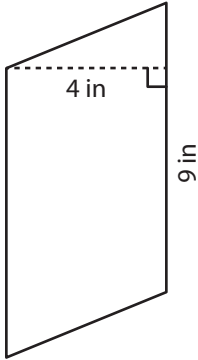


Area of a Parallelogram

Answer Key

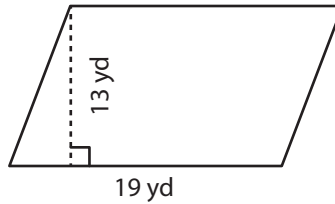
Find the area of each parallelogram.

1)



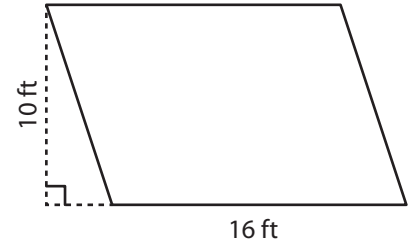
Area = 36 in²

2)



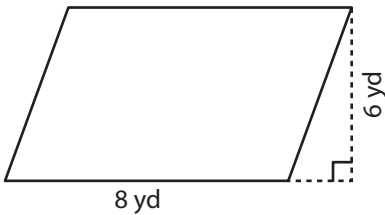
Area = 247 yd²

3)



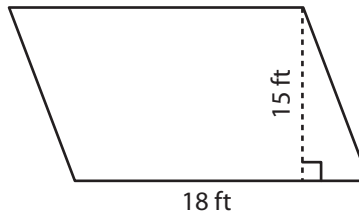
Area = 160 ft²

4)



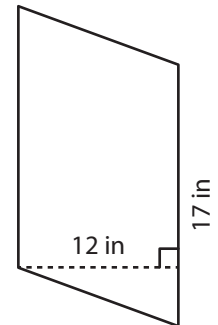
Area = 48 yd²

5)



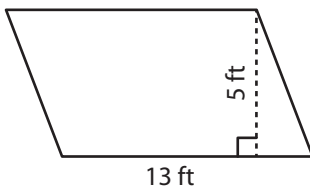
Area = 270 ft²

6)



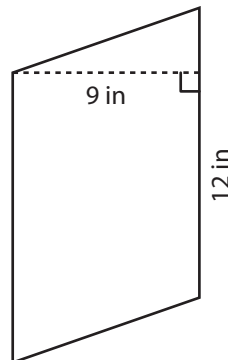
Area = 204 in²

7)



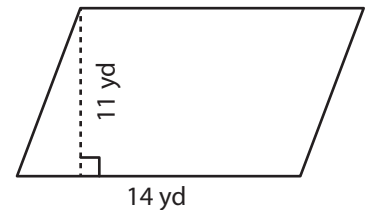
Area = 65 ft²

8)



Area = 108 in²

9)



Area = 154 yd²