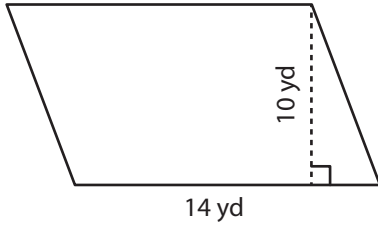


# Area of a Parallelogram

Answer Key

Find the area of each parallelogram.

1)



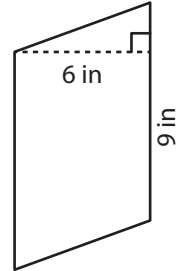
Area = 140 yd<sup>2</sup>

2)



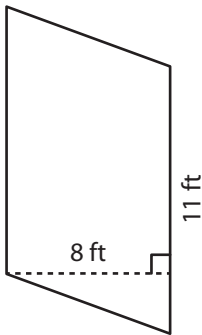
Area = 84 ft<sup>2</sup>

3)



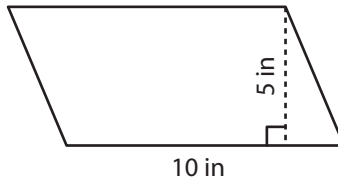
Area = 54 in<sup>2</sup>

4)



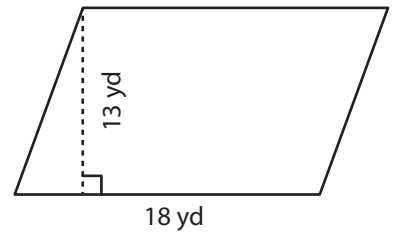
Area = 88 ft<sup>2</sup>

5)



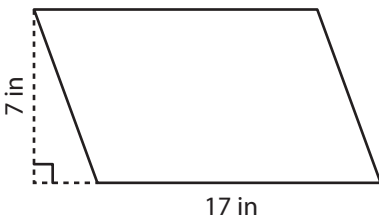
Area = 50 in<sup>2</sup>

6)



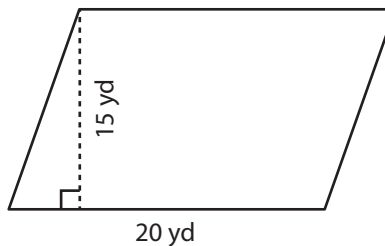
Area = 234 yd<sup>2</sup>

7)



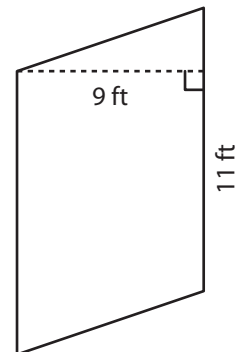
Area = 119 in<sup>2</sup>

8)



Area = 300 yd<sup>2</sup>

9)



Area = 99 ft<sup>2</sup>