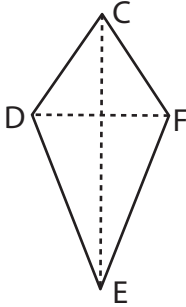


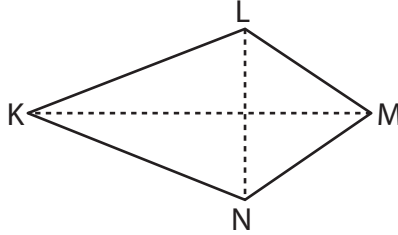
Area of a Kite

Find the area of each kite.

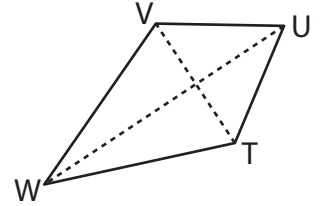
1)



2)



3)



4)

Ar

Preview

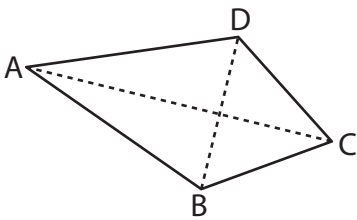
Become a member to unlock
unrestricted access to both printable
and online worksheets.



www.tutoringhour.com

Ar

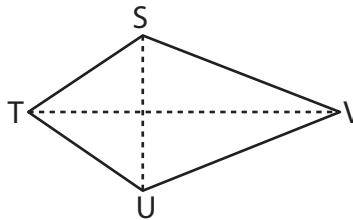
7)



$$CA = 19 \text{ ft}, BD = 10 \text{ ft}$$

Area = _____

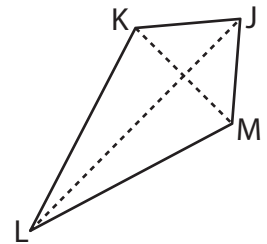
8)



$$SU = 8 \text{ in}, TV = 18 \text{ in}$$

Area = _____

9)



$$KM = 3 \text{ yd}, JL = 14 \text{ yd}$$

Area = _____