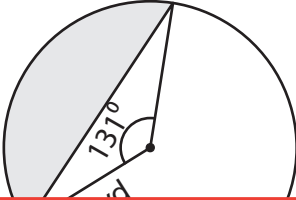


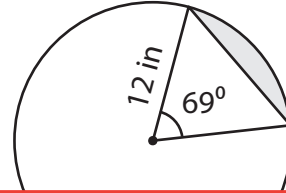
# Finding the Area of the Segment

Find the area of the segment in each circle. Round your answer to two decimal places. (Use 3.14 for  $\pi$ .)

1)



2)



3)

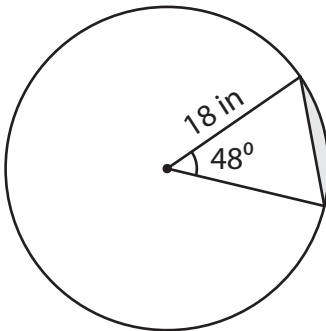
## Preview

Become a member to unlock  
unrestricted access to both printable  
and online worksheets.



[www.tutoringhour.com](http://www.tutoringhour.com)

5)



6)

