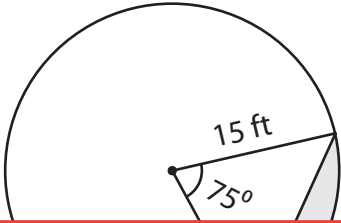


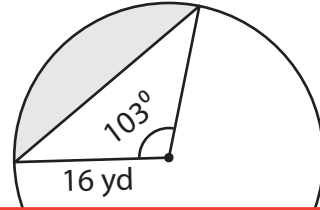
Finding the Area of the Segment

Find the area of the segment in each circle. Round your answer to two decimal places. (Use 3.14 for π .)

1)



2)



3)

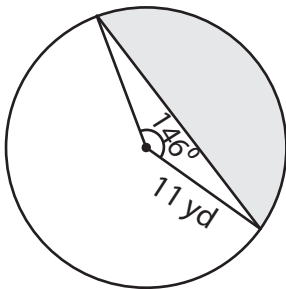
Preview

Become a member to unlock
unrestricted access to both printable
and online worksheets.



www.tutoringhour.com

5)



6)

