



# Counting Squares

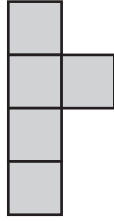
Check the shape that has the same area as the given shape.

 = 1 yd<sup>2</sup>

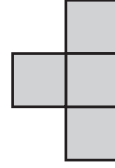
1)



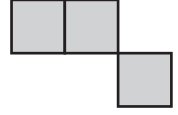
a)



b)



c)



2)

# Preview

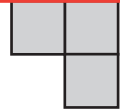
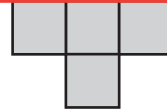

Become a member to unlock  
unrestricted access to both printable  
and online worksheets.




3)

[www.tutoringhour.com](http://www.tutoringhour.com)

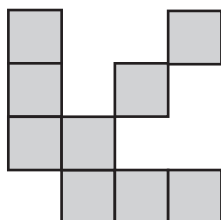
4)



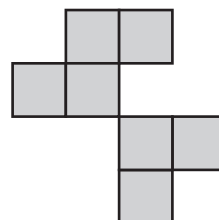
5)



a)



b)



c)

