



Counting Squares

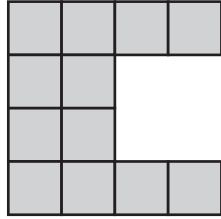
Check the shape that has the same area as the given shape.

 = 1 ft²

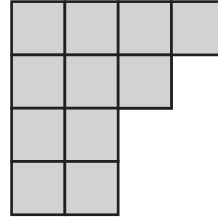
1)



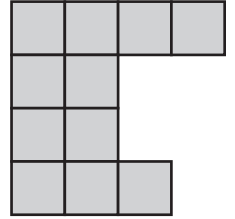
a)



b)



c)



2)

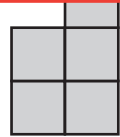
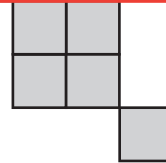
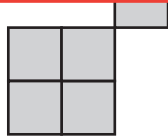
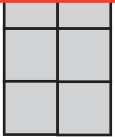
Preview

Become a member to unlock
unrestricted access to both printable
and online worksheets.




www.tutoringhour.com

3)

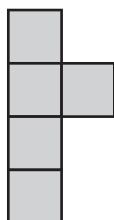


4)

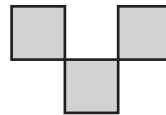
5)



a)



b)



c)

