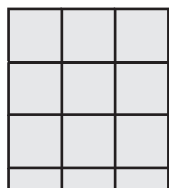


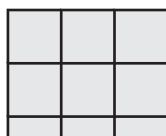
Counting Squares

Calculate the area of each shape by counting the squares.


1) Scale: $\square = 2 \text{ in}^2$



2) Scale: $\square = 4 \text{ yd}^2$



3) Scale: $\square = 3 \text{ ft}^2$



4)




Preview

Become a member to unlock
unrestricted access to both printable
and online worksheets.



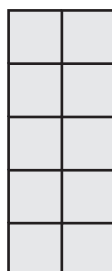
www.tutoringhour.com

7) Scale: $\square = 1 \text{ ft}^2$




Area = _____

8) Scale: $\square = 5 \text{ in}^2$



Area = _____

9) Scale: $\square = 3 \text{ yd}^2$



Area = _____