
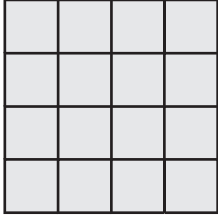


Counting Squares


Calculate the area of each shape by counting the squares.

 = 1 yd²

1)



2)



3)



4)

Preview

Become a member to unlock
unrestricted access to both printable
and online worksheets.



www.tutoringhour.com

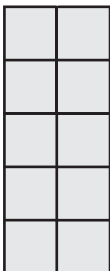
7)

Area = _____

Area = _____

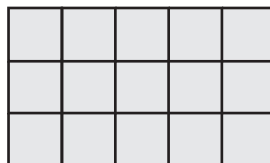
Area = _____

10)



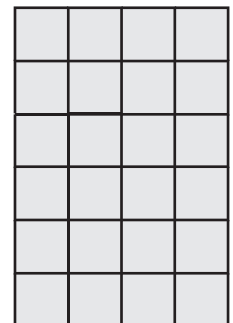
Area = _____

11)



Area = _____

12)



Area = _____