
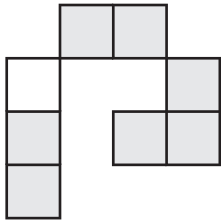


Counting Squares

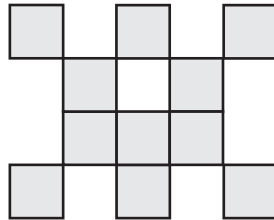
Calculate the area of each shape by counting the squares.

 = 1 yd²

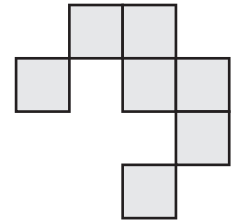
1)



2)



3)



Area = _____ yd²

Area = _____ yd²

Area = _____ yd²

4)

Preview

Become a member to unlock
unrestricted access to both printable
and online worksheets.



www.tutoringhour.com

Area = _____ yd²

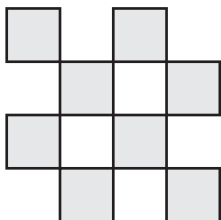
7)

Area = _____ yd²

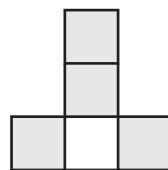
Area = _____ yd²

Area = _____ yd²

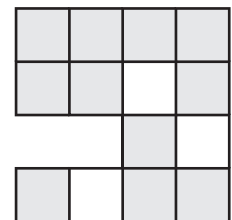
10)



11)



12)



Area = _____ yd²

Area = _____ yd²

Area = _____ yd²