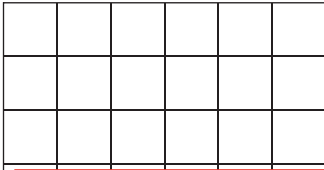


Counting Squares

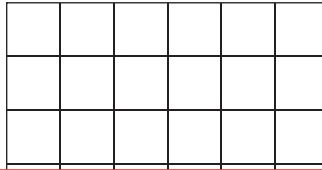
Draw a shape of the specified area in each grid.

 = 1 square unit

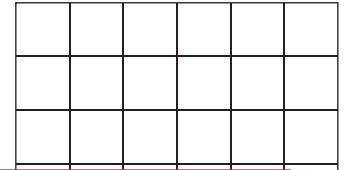
1) Area = 12 square units




2) Area = 3 square units



3) Area = 15 square units



4)



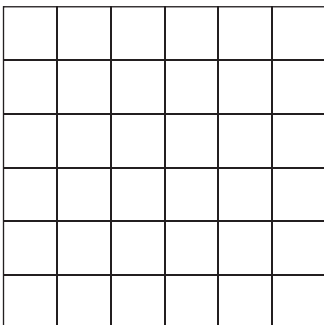
Preview

Become a member to unlock
unrestricted access to both printable
and online worksheets.

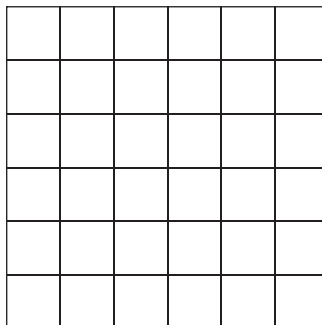


www.tutoringhour.com

7) Area = 15 square units



8) Area = 6 square units



9) Area = 18 square units

