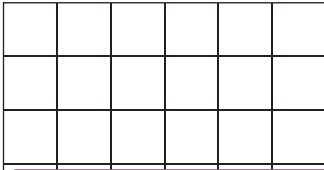


# Counting Squares

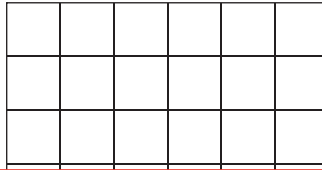
Draw a shape of the specified area in each grid.

 = 1 square unit

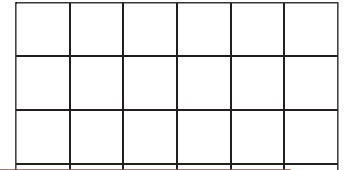
1) Area = 20 square units



2) Area = 18 square units



3) Area = 6 square units




4)

units

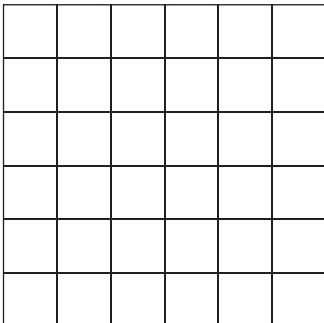
**Preview**

Become a member to unlock  
unrestricted access to both printable  
and online worksheets.

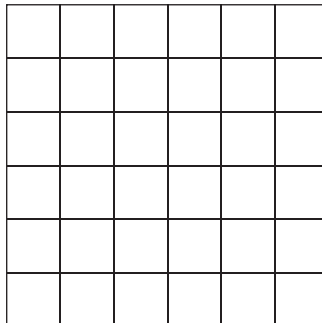


www.tutoringhour.com

7) Area = 9 square units



8) Area = 12 square units



9) Area = 8 square units

