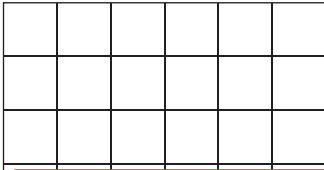


# Counting Squares

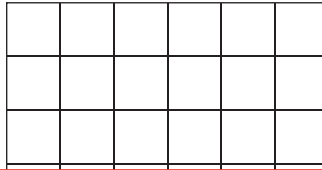
Draw a shape of the specified area in each grid.

 = 1 square unit

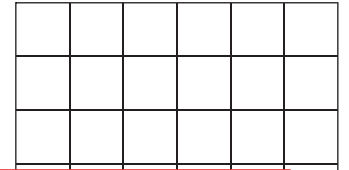
1) Area = 4 square units



2) Area = 10 square units



3) Area = 24 square units



4)

A



units



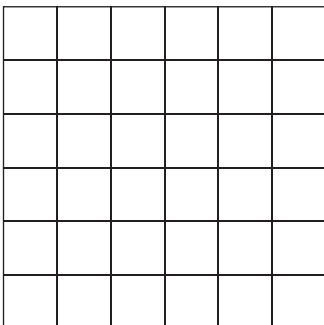
# Preview

Become a member to unlock  
unrestricted access to both printable  
and online worksheets.

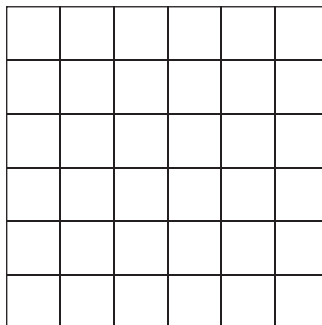


[www.tutoringhour.com](http://www.tutoringhour.com)

7) Area = 5 square units



8) Area = 25 square units



9) Area = 6 square units

