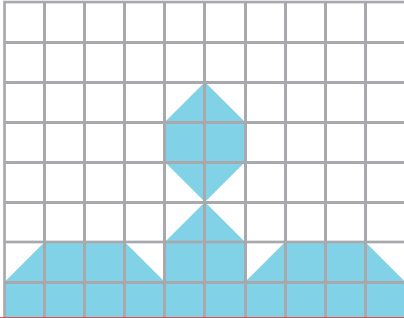


# Counting Squares

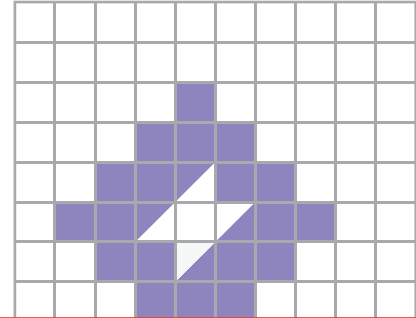
Find the area of the shaded region in each grid.

$\square = 1$  square unit

1)



2)



3)


## Preview

Become a member to unlock  
unrestricted access to both printable  
and online worksheets.




[www.tutoringhour.com](http://www.tutoringhour.com)

5)



6)



Area = \_\_\_\_\_ square units

Area = \_\_\_\_\_ square units