


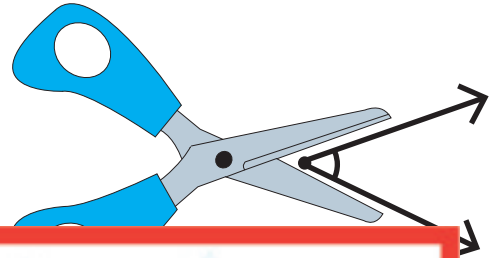
# Types of Angles

Look at the angle formed in each real-life object and label the angle as acute, right, obtuse, straight, reflex, or complete.

1)



2)



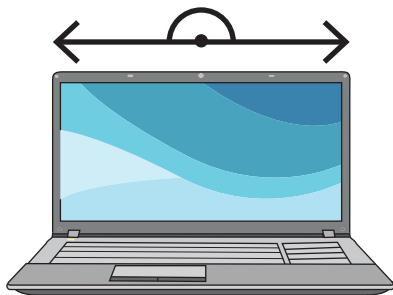
## Preview

Become a member to unlock  
unrestricted access to both printable  
and online worksheets.



[www.tutoringhour.com](http://www.tutoringhour.com)

5)



6)

