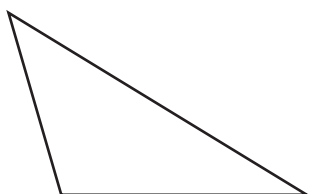


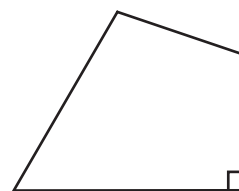
# Acute, Right, and Obtuse Angles

Count and write the number of angles of each type in the following figures.

1)



2)




3)

**Become a member to unlock  
unrestricted access to both printable  
and online worksheets.**




[www.tutoringhour.com](http://www.tutoringhour.com)

5)



6)



Number of acute angles: \_\_\_\_\_

Number of right angles: \_\_\_\_\_

Number of obtuse angles: \_\_\_\_\_

Number of acute angles: \_\_\_\_\_

Number of right angles: \_\_\_\_\_

Number of obtuse angles: \_\_\_\_\_