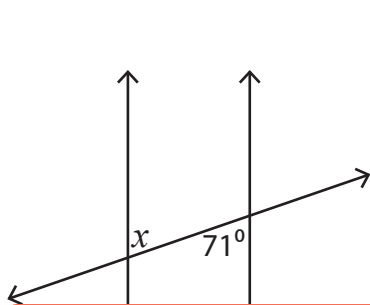


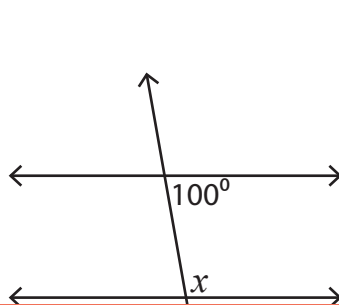
Interior Angles

Find the value of x in each figure below where two parallel lines are cut by a transversal.

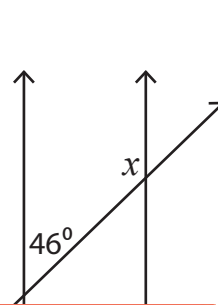
1)



2)



3)



Preview

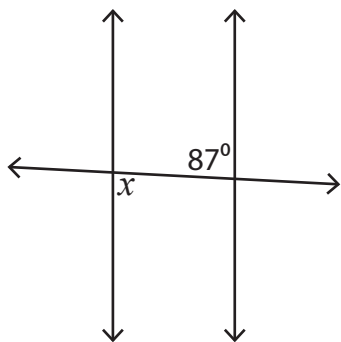
4)

Become a member to unlock
unrestricted access to both printable
and online worksheets.



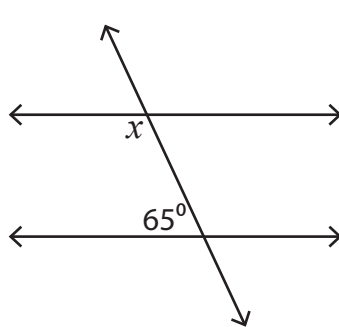
www.tutoringhour.com

7)



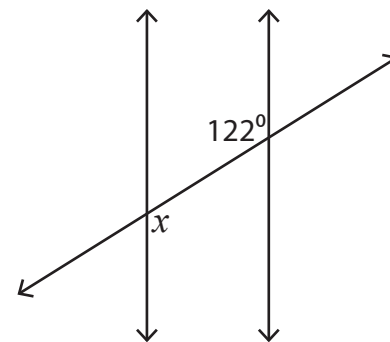
$$x = \underline{\hspace{2cm}}$$

8)



$$x = \underline{\hspace{2cm}}$$

9)



$$x = \underline{\hspace{2cm}}$$