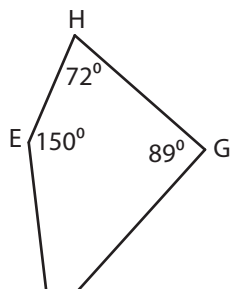


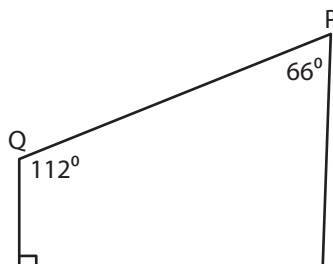
# Angles in a Quadrilaterals

Find the measure of the indicated angle in each quadrilateral.

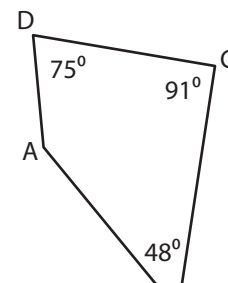
1)



2)



3)



4)

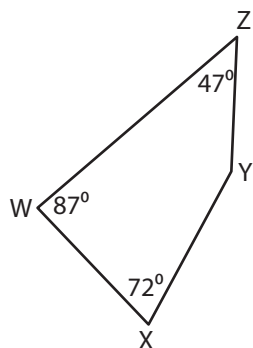
# Preview

Become a member to unlock  
unrestricted access to both printable  
and online worksheets.



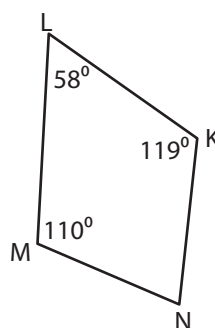
[www.tutoringhour.com](http://www.tutoringhour.com)

7)



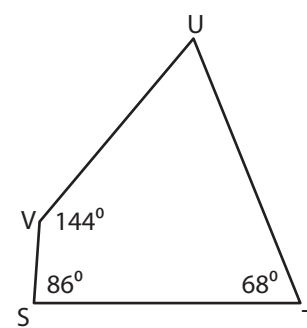
$$m\angle Y = \underline{\hspace{2cm}}$$

8)



$$m\angle N = \underline{\hspace{2cm}}$$

9)



$$m\angle U = \underline{\hspace{2cm}}$$