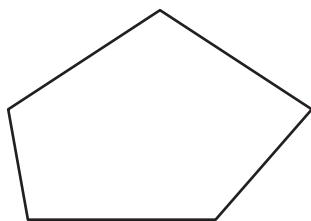


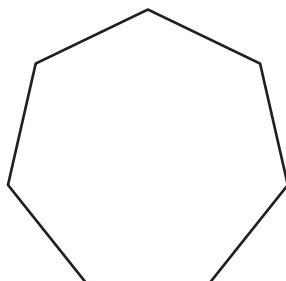
# Angles in Polygons

Find the sum of the interior angles of each polygon.

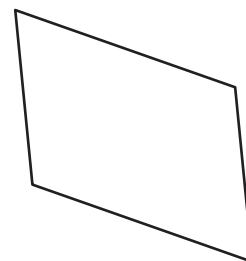
1)



2)



3)



Sum

# Preview

4)

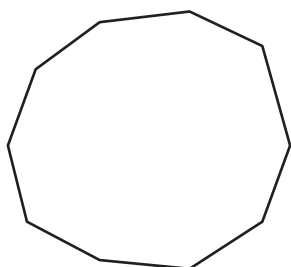
Become a member to unlock  
unrestricted access to both printable  
and online worksheets.

Sum

[www.tutoringhour.com](http://www.tutoringhour.com)



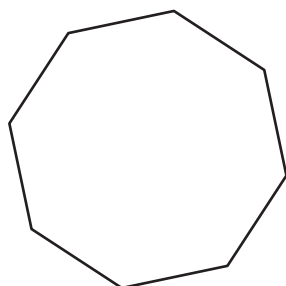
7)



Number of sides = \_\_\_\_\_

Sum of the interior angles = \_\_\_\_\_

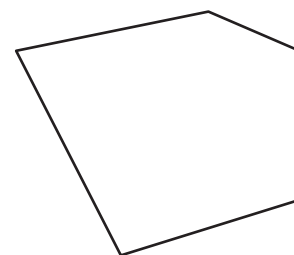
8)



Number of sides = \_\_\_\_\_

Sum of the interior angles = \_\_\_\_\_

9)



Number of sides = \_\_\_\_\_

Sum of the interior angles = \_\_\_\_\_