

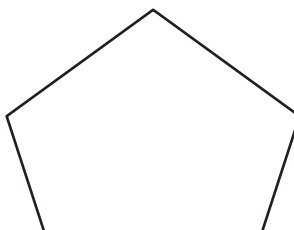
Angles in Polygons

Find the interior angles of each regular polygon. Round your answer to the nearest tenth.

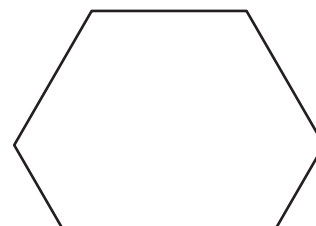
1)



2)



3)



Sum

Preview

4)

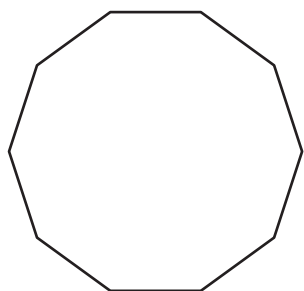
Become a member to unlock
unrestricted access to both printable
and online worksheets.

Sum

www.tutoringhour.com



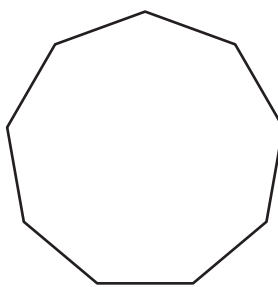
7)



Sum of the interior angles = _____

Each interior angle = _____

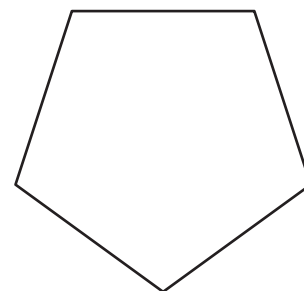
8)



Sum of the interior angles = _____

Each interior angle = _____

9)



Sum of the interior angles = _____

Each interior angle = _____