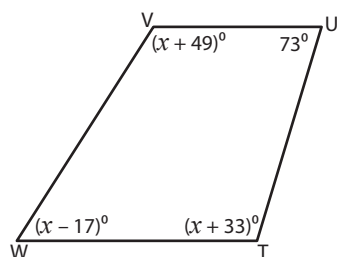


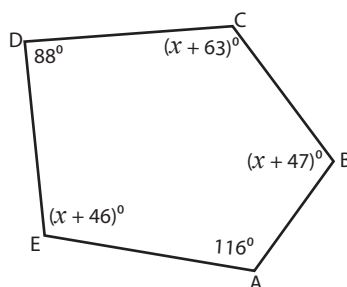
Angles in Polygons

Find the measures of the indicated angles.

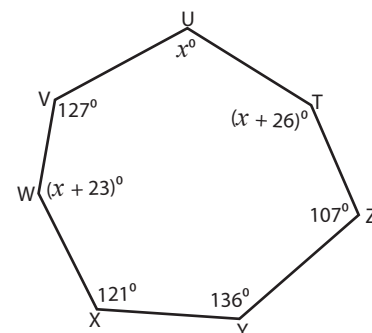
1)



2)



3)



Sum

 x $m\angle$

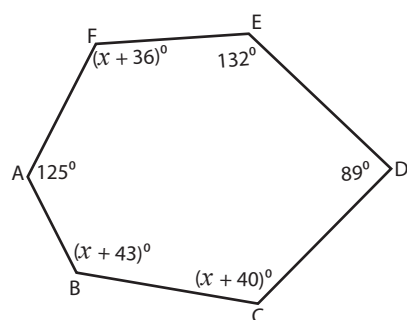
4)

DK

Sum

 x $m\angle$

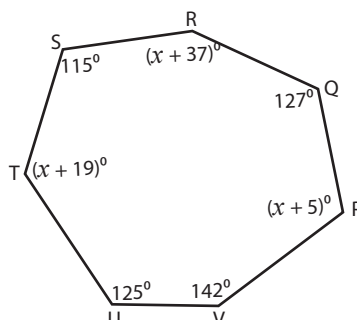
7)



Sum of the interior angles = _____

 x = _____ ; $m\angle B$ = _____ ; $m\angle C$ = _____ ; $m\angle F$ = _____

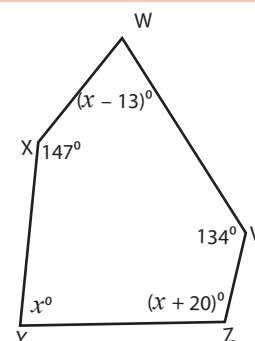
8)



Sum of the interior angles = _____

 x = _____ ; $m\angle P$ = _____ ; $m\angle R$ = _____ ; $m\angle T$ = _____

9)



Sum of the interior angles = _____

 x = _____ ; $m\angle W$ = _____ ; $m\angle Y$ = _____ ; $m\angle Z$ = _____

Preview

Become a member to unlock
unrestricted access to both printable
and online worksheets.

www.tutoringhour.com

