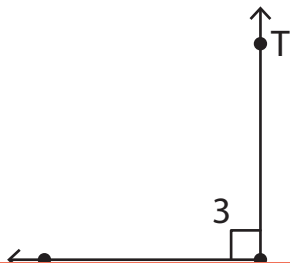


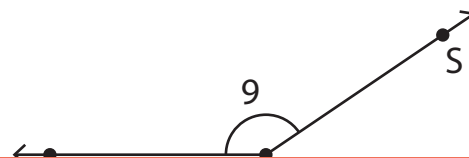
Naming Angles

Write the missing representation of each angle.

1)



2)



3)

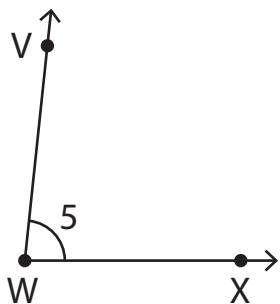
Preview

Become a member to unlock
unrestricted access to both printable
and online worksheets.



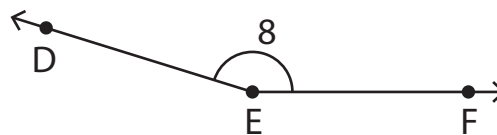
www.tutoringhour.com

5)



_____ \cong $\angle XWV$ \cong $\angle 5$ \cong $\angle W$

6)



$\angle DEF$ \cong _____ \cong $\angle 8$ \cong $\angle E$