


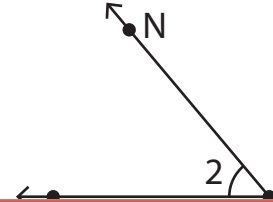
# Naming Angles

Write the missing representation of each angle.

1)



2)



3)

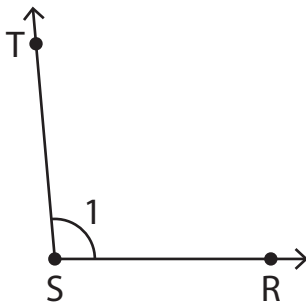
# Preview

Become a member to unlock  
unrestricted access to both printable  
and online worksheets.



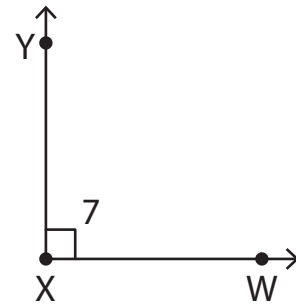
www.tutoringhour.com

5)



$\angle RST \cong \angle TSR \cong \angle 1 \cong$  \_\_\_\_\_

6)



\_\_\_\_\_  $\cong \angle YXW \cong \angle 7 \cong \angle X$