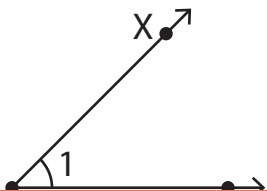


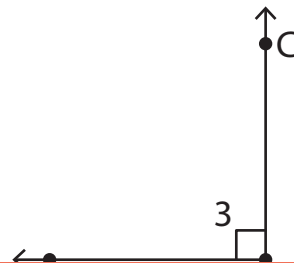
Naming Angles

Write the missing representation of each angle.

1)



2)



3)

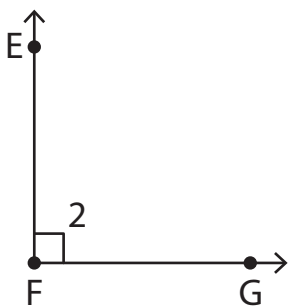
Preview

Become a member to unlock
unrestricted access to both printable
and online worksheets.



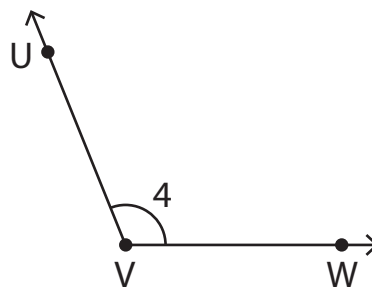
www.tutoringhour.com

5)



$\angle EFG \cong \underline{\hspace{1cm}} \cong \angle 2 \cong \angle F$

6)



$\angle UVW \cong \angle WVU \cong \underline{\hspace{1cm}} \cong \angle V$