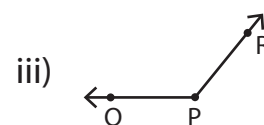
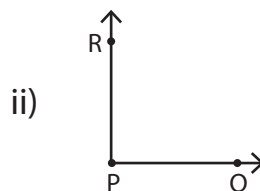
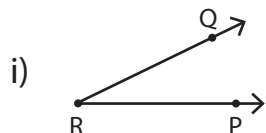


Parts of an Angle

1) Which angle doesn't have \overrightarrow{PQ} as one of its arms?



2) 

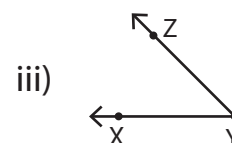
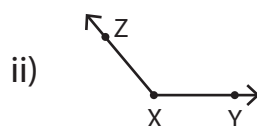
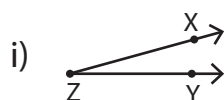
Preview

Become a member to unlock
unrestricted access to both printable
and online worksheets.

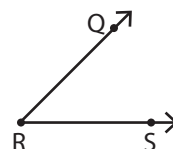


3) 

www.tutoringhour.com



5) Which of the following is not an arm of the angle?



i) \overrightarrow{QS}

ii) \overrightarrow{RS}

iii) \overrightarrow{RQ}