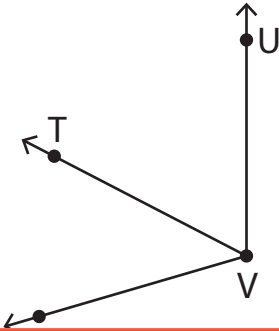


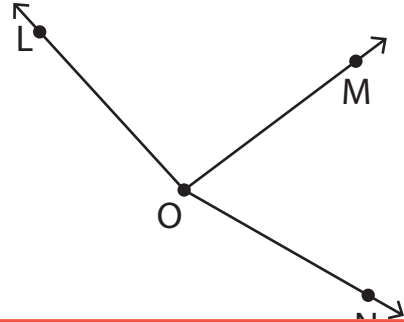
Naming Angles

In each figure below, name the angles that share a common vertex.

1)



2)



3)

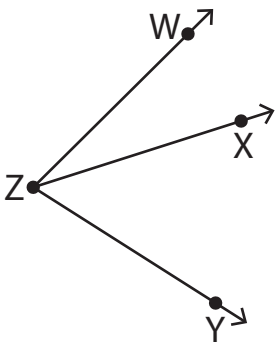
Preview

Become a member to unlock
unrestricted access to both printable
and online worksheets.



www.tutoringhour.com

5)



6)

