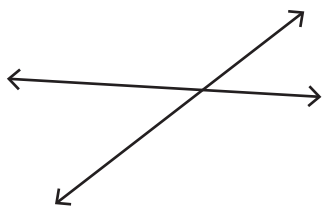


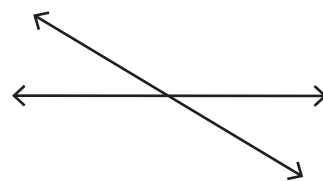
Vertical Angles

A) Mark the vertically opposite angles in each pair of intersecting lines.

1)



2)

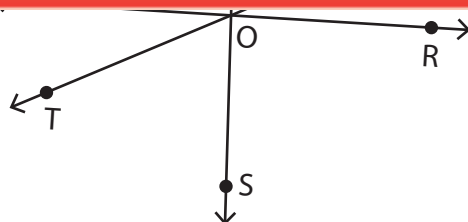


Preview

Become a member to unlock
unrestricted access to both printable
and online worksheets.



www.tutoringhour.com



1) $\angle TOS$: _____

2) $\angle ROT$: _____

3) $\angle ROQ$: _____

4) $\angle QOS$: _____

5) $\angle POU$: _____

6) $\angle POR$: _____