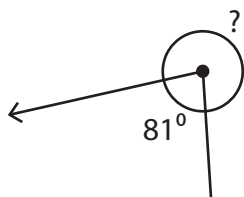


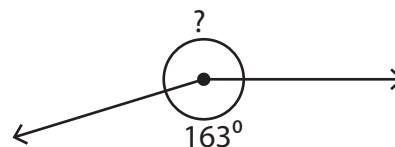
Angles around a Point

Find the measure of the unknown angle in each figure.

1)



2)



3)

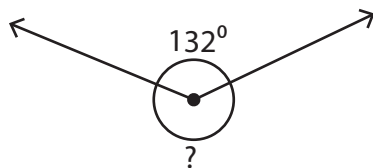
Preview

Become a member to unlock
unrestricted access to both printable
and online worksheets.



www.tutoringhour.com

5)



6)

