

# Supplementary Angles

1) Find the pair of angles that are not supplementary.

- a)  $49^\circ, 131^\circ$       b)  $117^\circ, 63^\circ$       c)  $57^\circ, 123^\circ$       d)  $53^\circ, 120^\circ$


2) Which pair of angles is not supplementary?

3) W

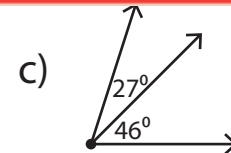
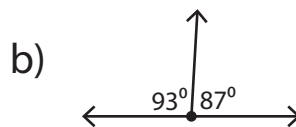
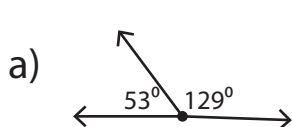
4) W

## Preview

Become a member to unlock  
unrestricted access to both printable  
and online worksheets.



[www.tutoringhour.com](http://www.tutoringhour.com)



5) Find the pair of angles that are supplementary.

- a)  $74^\circ, 69^\circ$       b)  $77^\circ, 103^\circ$       c)  $107^\circ, 37^\circ$       d)  $112^\circ, 53^\circ$