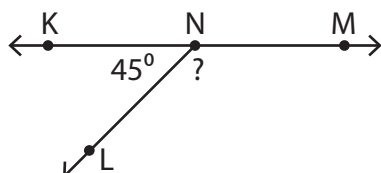


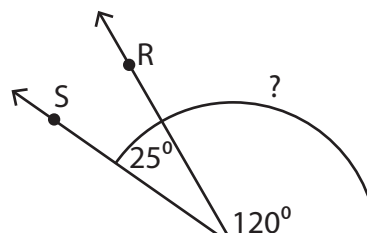
# Pairs of Angles

Find the measure of the indicated angle in each figure.

- 1)  $\overleftrightarrow{KM}$  is a straight line.



- 2)



## Preview

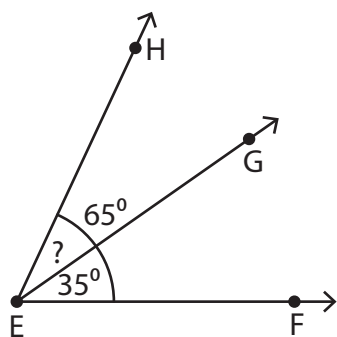
Become a member to unlock  
unrestricted access to both printable  
and online worksheets.



[www.tutoringhour.com](http://www.tutoringhour.com)

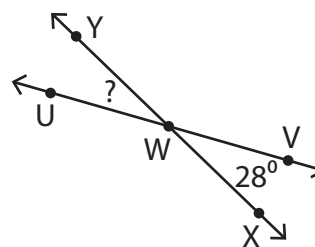
- 3)

- 5)



$$m\angle GEH = \underline{\hspace{2cm}}$$

- 6)  $\overleftrightarrow{UV}$  and  $\overleftrightarrow{XY}$  are intersecting lines.



$$m\angle UWY = \underline{\hspace{2cm}}$$