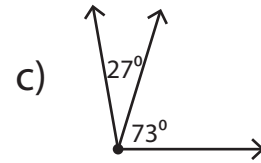
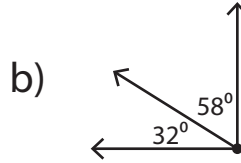
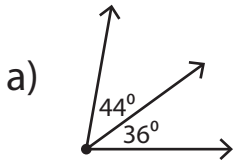


# Complementary Angles

1) Which of the following is a pair of complementary angles?



2) Fill in the blank.

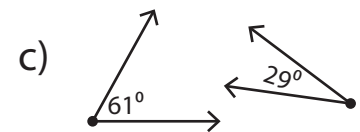
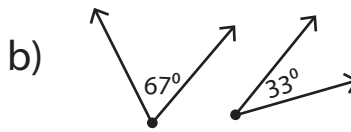
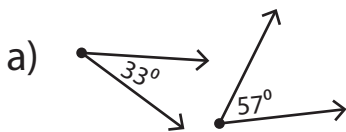
# Preview

3) Fill in the blank.

Become a member to unlock  
unrestricted access to both printable  
and online worksheets.

4) Write down the website.

[www.tutoringhour.com](http://www.tutoringhour.com)



5) Which of the following is a complement of  $49^\circ$ ?

a)  $41^\circ$

b)  $20^\circ$

c)  $51^\circ$

d)  $39^\circ$