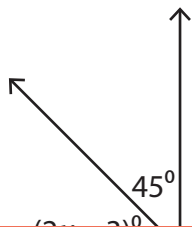


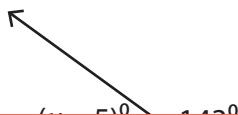
Complementary & Supplementary Angles

Find the value of x in each pair of complementary or supplementary angles.

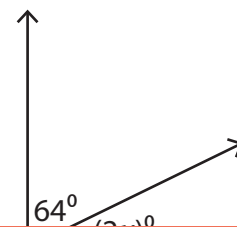
1)



2)



3)



4)

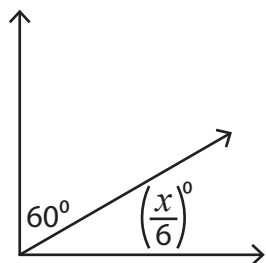
Preview

Become a member to unlock
unrestricted access to both printable
and online worksheets.



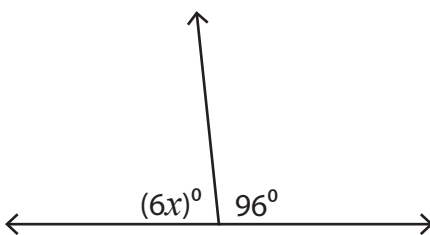
www.tutoringhour.com

7)



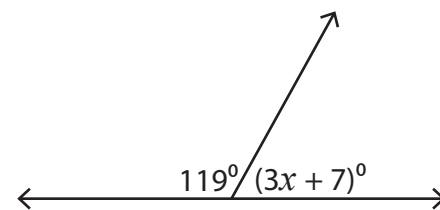
$x =$ _____

8)



$x =$ _____

9)



$x =$ _____