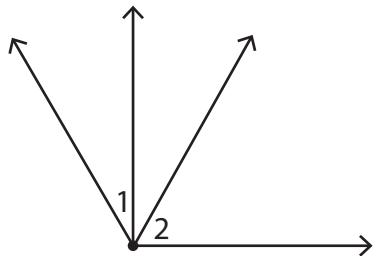


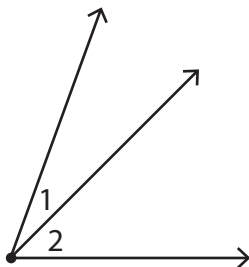
Adjacent Angles

A) In each figure, state whether $\angle 1$ and $\angle 2$ are adjacent angles.

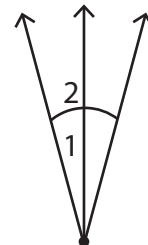
1)



2)



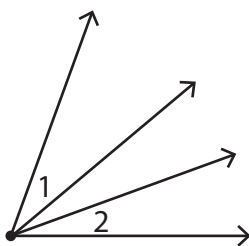
3)



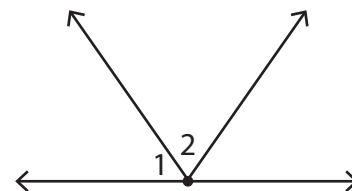
4)



5)

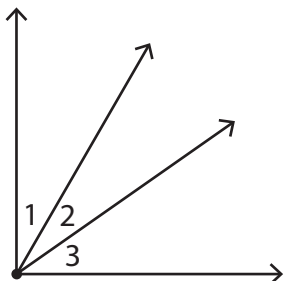


6)

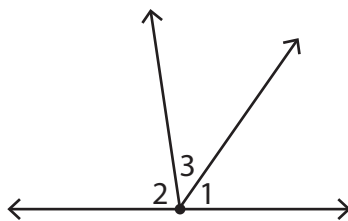


B) Identify the two pairs of adjacent angles in each figure.

1)



2)



3)

