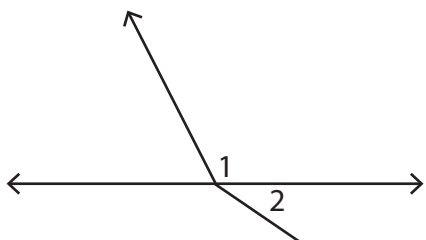


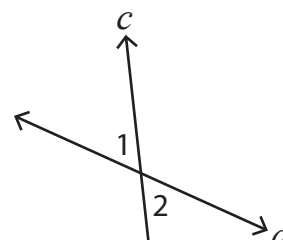
Pairs of Angles

In each figure, identify $\angle 1$ and $\angle 2$ as adjacent, vertical, or linear.

1)



2) c and d are straight lines.



3) u

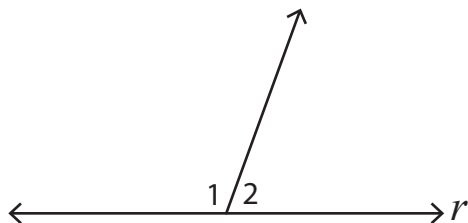
Preview

Become a member to unlock
unrestricted access to both printable
and online worksheets.



www.tutoringhour.com

5) r is a straight line.



6)

