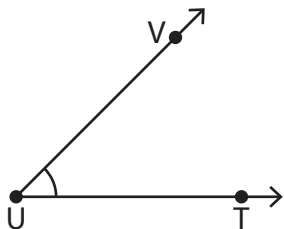


Measuring Angles | 5° Increments

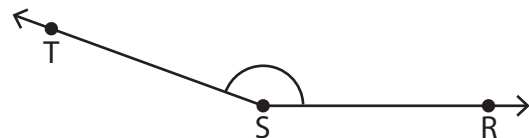
Measure each angle using a protractor.

1)



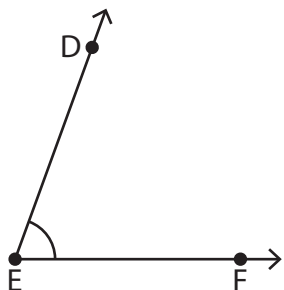
$$m\angle VUT = \underline{\hspace{2cm}}$$

2)



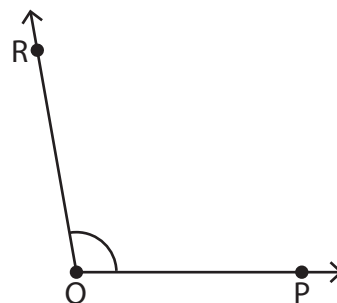
$$m\angle RST = \underline{\hspace{2cm}}$$

3)



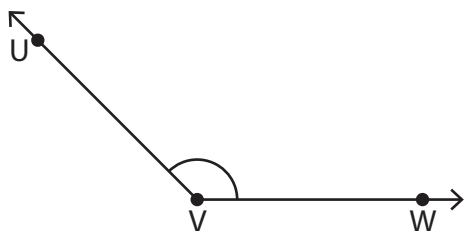
$$m\angle DEF = \underline{\hspace{2cm}}$$

4)



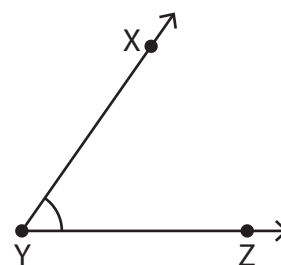
$$m\angle PQR = \underline{\hspace{2cm}}$$

5)



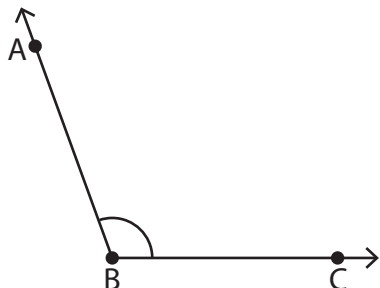
$$m\angle UVW = \underline{\hspace{2cm}}$$

6)



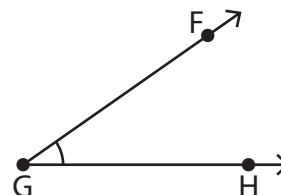
$$m\angle XYZ = \underline{\hspace{2cm}}$$

7)



$$m\angle ABC = \underline{\hspace{2cm}}$$

8)



$$m\angle FGH = \underline{\hspace{2cm}}$$