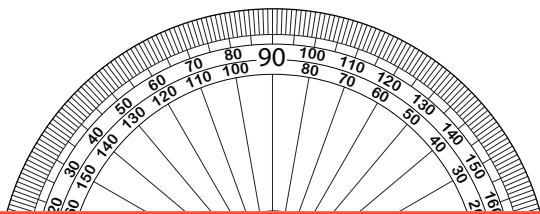


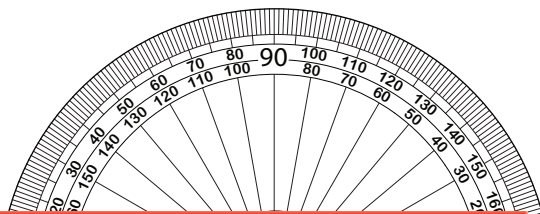
Drawing Angles | 1° Increments

Draw the other ray on each protractor to create the specified angle.

1) 157°



2) 28°



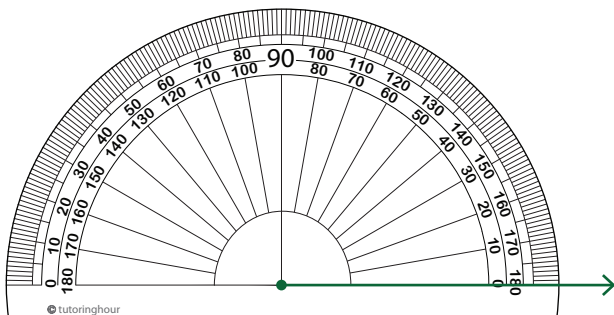
Preview

3) 7

Become a member to unlock
unrestricted access to both printable
and online worksheets.

www.tutoringhour.com

5) 90°



6) 65°

