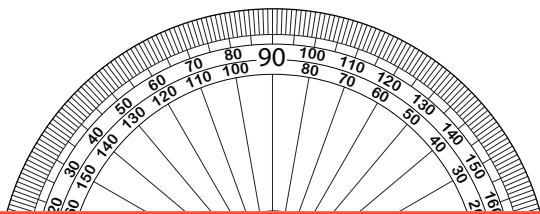


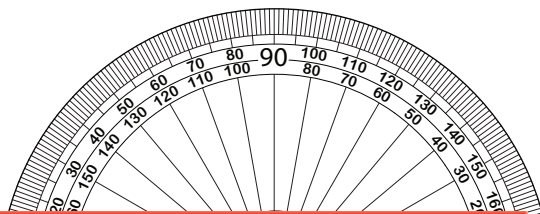
# Drawing Angles | 1° Increments

Draw the other ray on each protractor to create the specified angle.

1)  $42^\circ$



2)  $134^\circ$



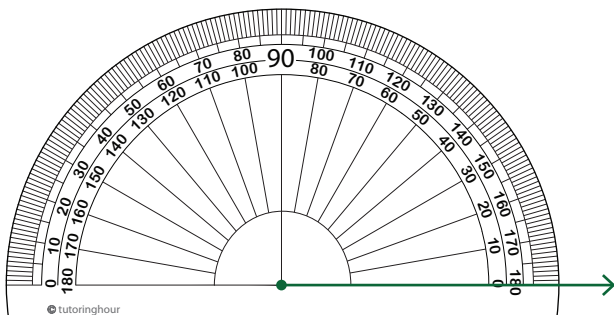
## Preview

3) 1

Become a member to unlock  
unrestricted access to both printable  
and online worksheets.

[www.tutoringhour.com](http://www.tutoringhour.com)

5)  $51^\circ$



6)  $110^\circ$

