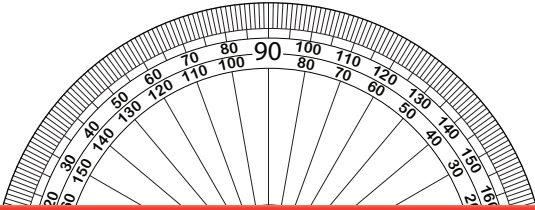


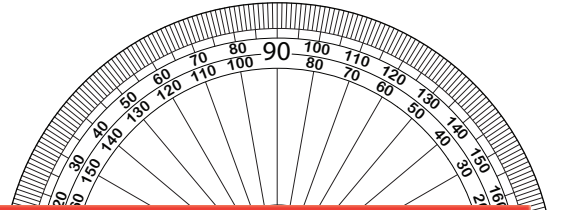
# Drawing Angles | Inner and Outer Scales

Draw the other ray on each protractor to create the specified angle.

1)  $154^\circ$



2)  $85^\circ$



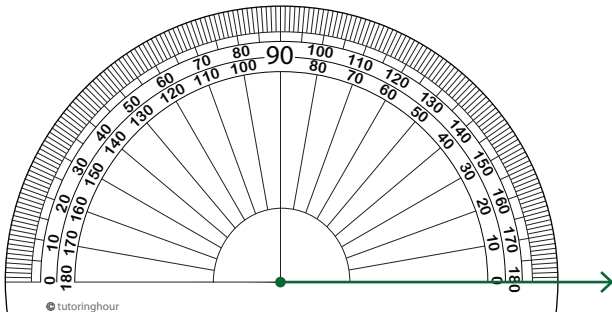
## Preview

Become a member to unlock  
unrestricted access to both printable  
and online worksheets.

[www.tutoringhour.com](http://www.tutoringhour.com)

3)  $90^\circ$

5)  $160^\circ$



6)  $18^\circ$

