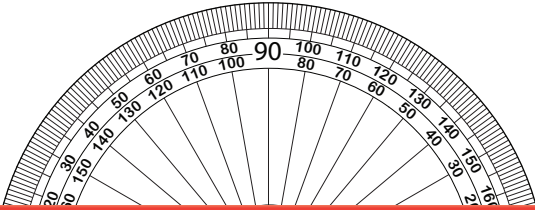


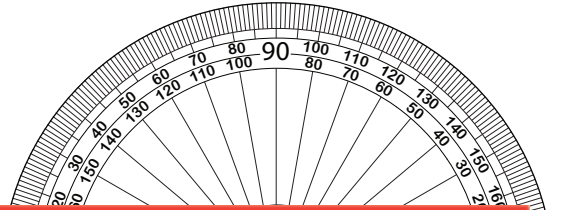
Drawing Angles | Inner and Outer Scales

Draw the other ray on each protractor to create the specified angle.

1) 163°



2) 46°



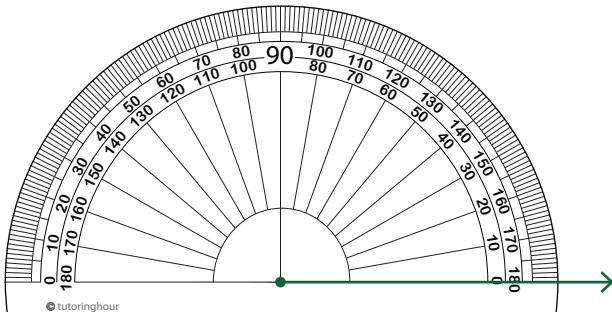
Preview

Become a member to unlock
unrestricted access to both printable
and online worksheets.

www.tutoringhour.com

3) 2

5) 137°



6) 65°

