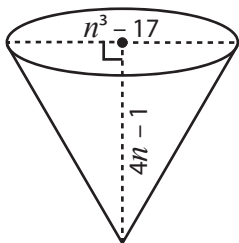


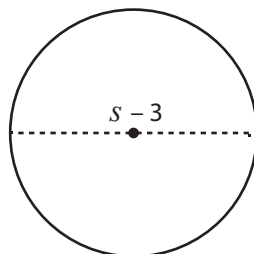
Evaluating Algebraic Expressions | Shapes

Find the measurement.

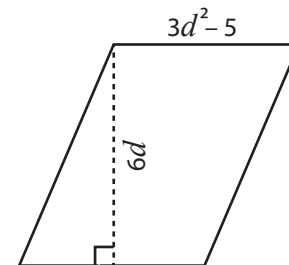
1) $n = 3$



2) $s = 5$



3) $d = 2$



4)

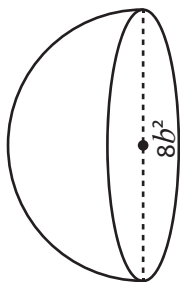
Preview

Become a member to unlock
unrestricted access to both printable
and online worksheets.



www.tutoringhour.com

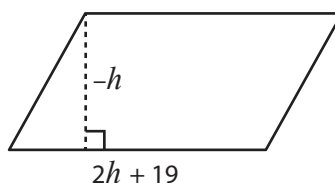
7) $b = -1$



Diameter = _____

Radius = _____

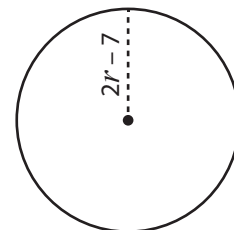
8) $h = -5$



Base = _____

Height = _____

9) $r = 7$



Diameter = _____

Radius = _____