


Addition Word Problems


- 1) Laura has 5 stamps. Her friend, Sara, gave her 4 more. How many stamps does Laura have in all?




- 2) Mike ate 2 vanilla cupcakes and 2 chocolate cupcakes. How many cupcakes did he eat in all?



- 3) Sharon's backyard has 3 oak trees and 4 apple trees. How many trees are there in all?



- 4) Liam has 8 candles. His brother buys a pack of 10 candles. How many candles are there in all?



- 5) Adam watched 5 movies last week. If he has seen 9 movies this week, how many movies did he watch in all?

