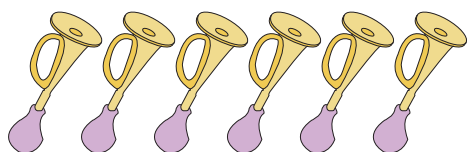


Addition within 20

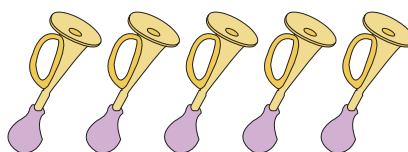
Answer Key

Count the pictures and write the addition sentence to represent each model.

1)



+



6

+

5

=

11

2)



+



1


+

8

=

9

3)



+



8

+

4

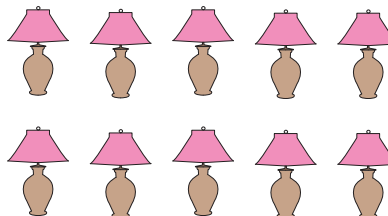
=

12

4)



+



5

+

10

=

15

5)



+



7

+

7

=

14